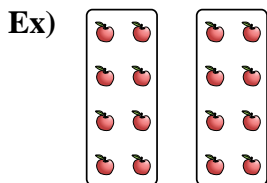


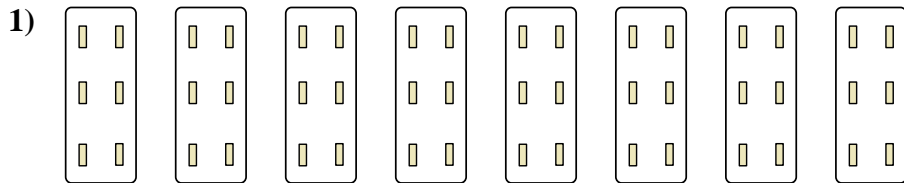


Express each set as a multiplication problem.

Answers



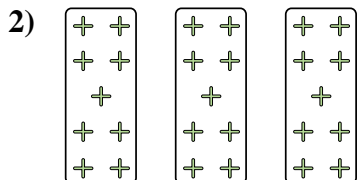
Ex. $2 \times 8 = 16$



1. _____

2. _____


3. _____



4. _____



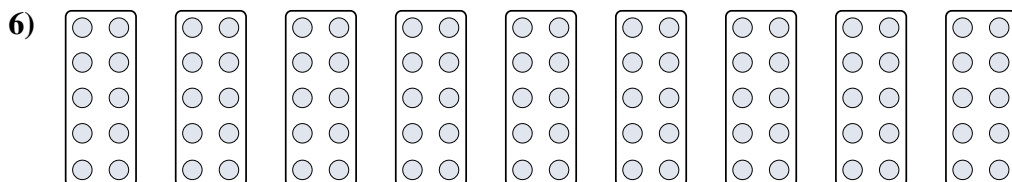
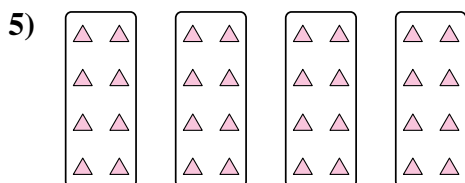
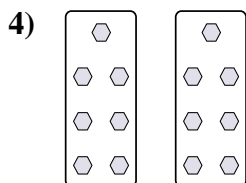
5. _____

6. _____





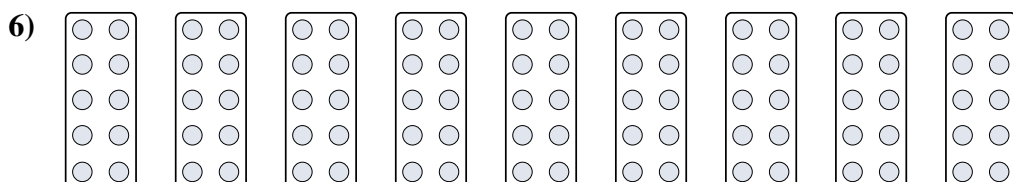
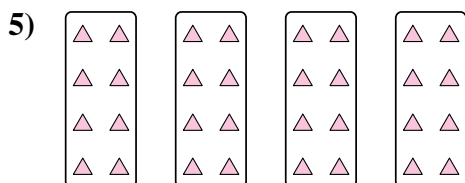
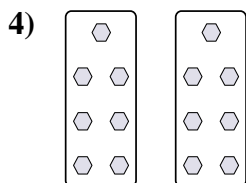

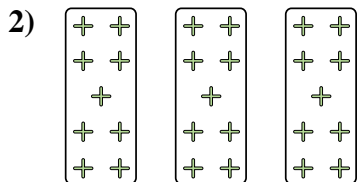
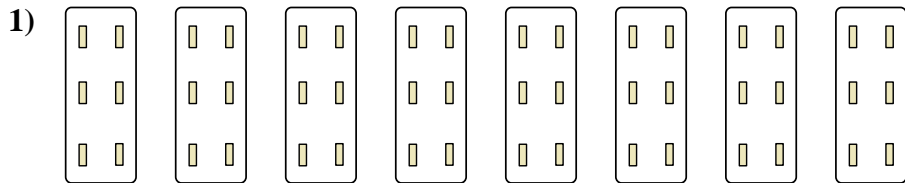

7. _____

8. _____





Express each set as a multiplication problem.



Answers

Ex. $2 \times 8 = 16$

1. $8 \times 6 = 48$

2. $3 \times 9 = 27$

3. $2 \times 10 = 20$

4. $2 \times 7 = 14$

5. $4 \times 8 = 32$

6. $9 \times 10 = 90$

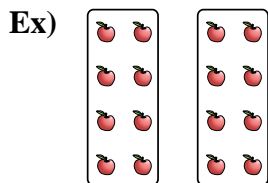
7. $6 \times 10 = 60$

8. $3 \times 7 = 21$

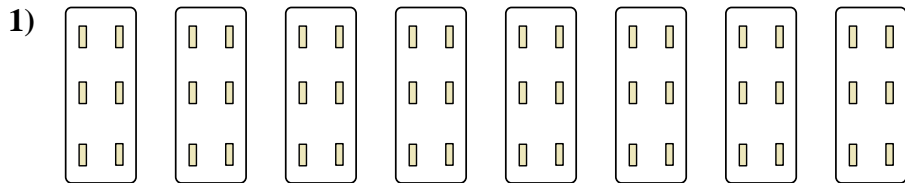


Express each set as a multiplication problem.

Answers



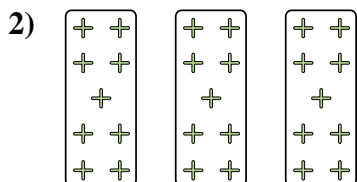
Ex. $2 \times 8 = 16$



1. _____

2. _____


3. _____



4. _____

5. _____

6. _____



7. _____

8. _____

